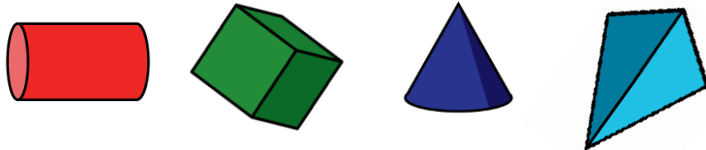


Name \_\_\_\_\_

1 Match each shape to its name.



cube

cylinder

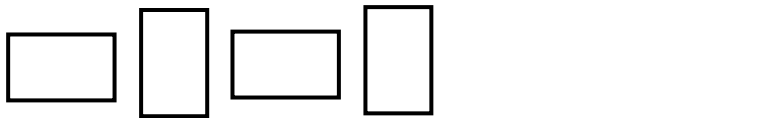
pyramid

cone



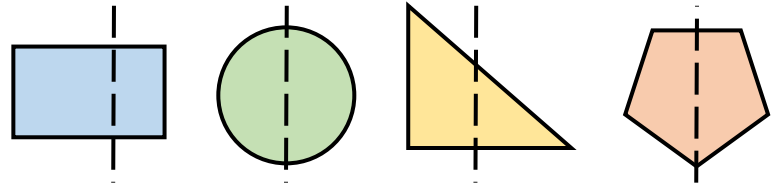
1 mark

2 Draw the next two shapes in each pattern.



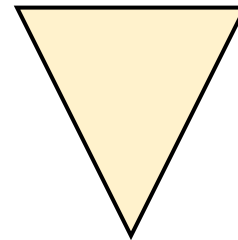
2 marks

3 Circle the shapes with a correct line of symmetry.



1 mark

4 Complete the sentences.



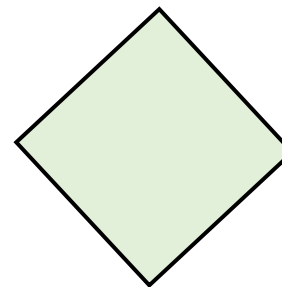
This is a triangle

It has  sides.

It has 3 vertices.



1 mark



This is a \_\_\_\_\_

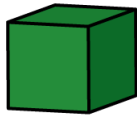

It has  sides.

It has  vertices.

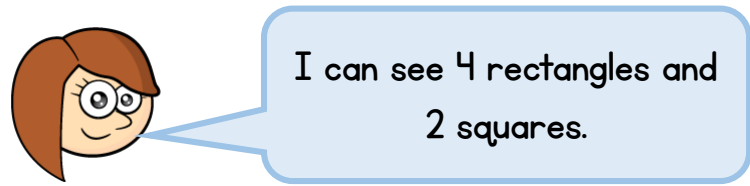


2 marks

5 Complete the table.

Shape	Faces	Edges	Vertices
 Cube	6		8
 Square-based pyramid		8	5

6 Rosie is holding a 3-D shape. She is counting the number of 2-D faces she can see.




What shape is Rosie holding?

\_\_\_\_\_

☐ 2 marks

☐ 1 mark

7 Amir has sorted some 3-D shapes.



Choose one correct label for each group from the labels below.

Cylinders

Cuboids

Cubes

Curved surfaces

☐ 2 marks

Circle how confident you feel with shape.

1                      2                      3                      4                      5  
 Not                      Very  
 confident                      confident